


1st GRADE Math Warm Ups

1.OA I-2


(13) 12 pencils
5 pens



$12 - 7 = 5$

13

There are 12 pencils and 5 pens. How many fewer pens are there?



1.OA.A.1 Compare – Difference Unknown
1.OA.A.1 Change Unknown
1.OA.A.1 Change Unknown-Take from
1.OA.A.1 Put Together



SLIDES • TASK CARDS • JOURNAL PROMPTS

INTERACTIVE WHITEBOARD SLIDES

3 cats were on the mat.
Some more cats came. Now
there are 8 cats on the mat. 
How many cats came to the mat?

$$000 \mid \underline{\quad ? \quad} = 8$$

$$3 + \boxed{5} = 8$$

$$000 \mid 000000$$

©Christina Winter - Mrs. Winter's Bliss 2018




TASK CARDS




... were on the mat. Some more cats came. Now there are 8 cats on the mat. How many cats came to the mat?

1.OA.A.1 Change Unknown-Add To


An illustration of a dog and a cat. The dog is on the left, sitting on a mat. The cat is on the right, also sitting on a mat.

13 12 pencils
5 pens

A hand-drawn diagram showing 12 pencils and 5 pens. The pencils are represented by small circles with erasers, and the pens are represented by small circles with caps. A box is drawn around the last 7 pencils, with the number 7 written above it.


$12 - 7 = 5$

13 There are 12 pencils and 5 pens. How many fewer pens are there?

An illustration of a pencil and a pen. The pencil is on the left, and the pen is on the right.

1.OA.A.1 Compare - Difference Unknown

CCSS labeled



JOURNAL PROMPTS



3 cats were on the mat. Some more cats came. Now there are 8 cats on the mat. How many cats came to the mat?

$$000 \mid \quad ? \quad = 8$$

$$3 + \boxed{5} = 8$$

$$000 \mid 000000$$

5