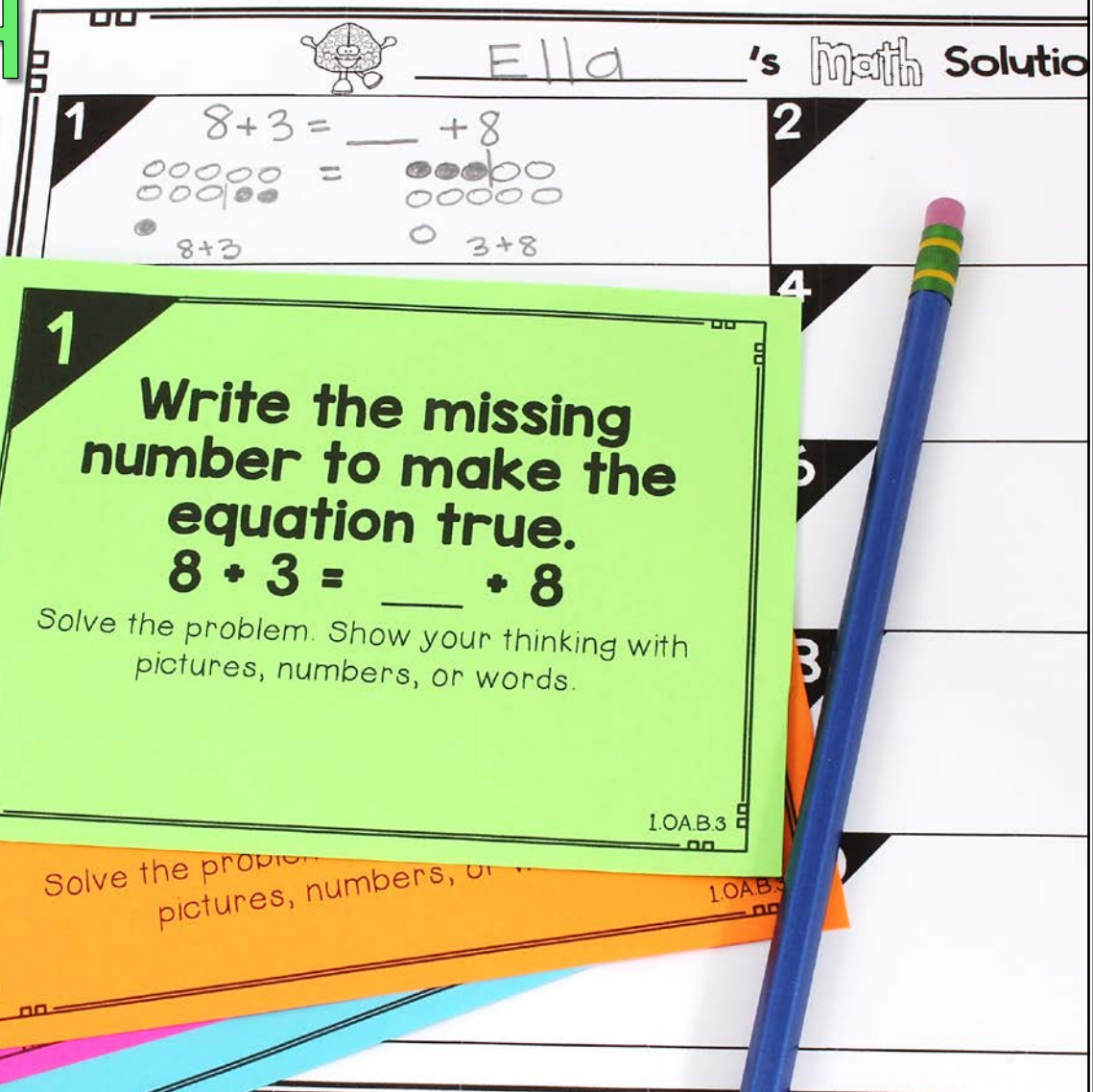


1st GRADE Math Warm Ups

1.OA 3-4



1 Write the missing number to make the equation true.
 $8 + 3 = \underline{\quad} + 8$

Solve the problem. Show your thinking with pictures, numbers, or words.

1.OA.B.3



SLIDES • TASK CARDS • JOURNAL PROMPTS

INTERACTIVE WHITEBOARD SLIDES

Sam has 3 cats, 2 dogs, and
10 birds. How many animals
does he have in all?

Solve the problem. Show your thinking with
pictures, numbers, or words.



$$3 + 2 + 10 = \square$$
$$5 + 10 = 15$$




©Christina Winter - Mrs. Winter's Bliss 2018





TASK CARDS



Solve the problem. Show your thinking with pictures, numbers, or words.

 Ella's

1 $8 + 3 = \underline{\quad} + 8$

 = 

$8 + 3$ $3 + 8$

1


Write the missing number to make the equation true.

$$8 + 3 = \underline{\quad} + 8$$

Solve the problem. Show your thinking with pictures, numbers, or words.

1.OA.B.3

CCSS labeled



JOURNAL PROMPTS

**There are 4 red pens, 3 pink pens
and 5 blue pens. How many pens are
there in all?**

Solve the problem. Show your thinking with pictures,
numbers, or words.

